

NAME _____

DATE _____

**Number Corner Checkup 1** page 1 of 4

- 1** Solve each story problem below. Use numbers, pictures, or words to show your thinking. Write an equation to match the problem.
- a** Some dogs were playing in the park. Six more dogs ran over to play with them. Then there were 13 dogs. How many dogs were in the park before?

My Equation:

- b** There were some apples in the bowl. Pablo and his friends ate 5 of the apples. Then there were 9 apples left in the bowl. How many apples were in the bowl before?

My Equation:

(continued on next page)

NAME _____

DATE _____


Number Corner Checkup 1 page 2 of 4


2 Count the dots below.



- a** How many dots are there? _____
- b** Is the number of dots odd or even? How do you know? Use pictures, numbers, or words to explain your answer.

3 Look at the rows and columns in the arrays below. Find the number of objects and write an addition equation to show your thinking.

a  My Equation _____

b  My Equation _____

4 Count by 5s to fill in the missing numbers.

- a** 85, _____, _____, _____, _____, _____
- b** _____, _____, 215, _____, _____, _____

5 Count by 10s to fill in the missing numbers.

- a** 270, _____, _____, _____, _____, _____
- b** _____, _____, _____, 410, _____, _____

(continued on next page)

NAME _____

DATE _____

Number Corner Checkup 1 page 3 of 4

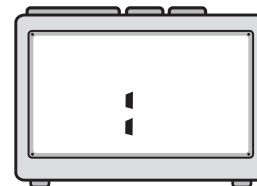
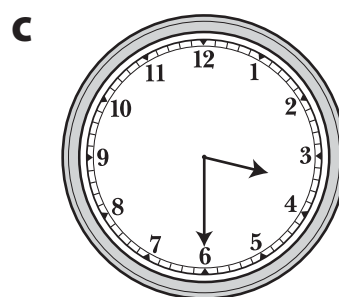
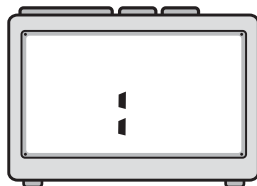
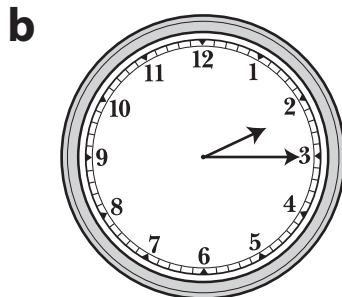
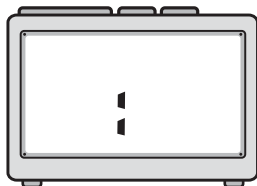
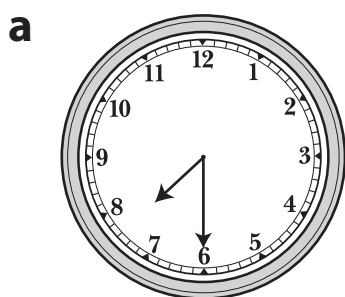
6 Solve as many of these addition problems as you can in one minute.

| | | | | | | |
|--|--|--|--|---|--|---|
| $\begin{array}{r} 10 \\ + 1 \\ \hline \end{array}$ | $\begin{array}{r} 0 \\ + 12 \\ \hline \end{array}$ | $\begin{array}{r} 1 \\ + 18 \\ \hline \end{array}$ | $\begin{array}{r} 12 \\ + 2 \\ \hline \end{array}$ | $\begin{array}{r} 4 \\ + 6 \\ \hline \end{array}$ | $\begin{array}{r} 14 \\ + 3 \\ \hline \end{array}$ | $\begin{array}{r} 7 \\ + 3 \\ \hline \end{array}$ |
|--|--|--|--|---|--|---|

| | | | | | | |
|---|---|---|---|--|---|--|
| $\begin{array}{r} 6 \\ + 4 \\ \hline \end{array}$ | $\begin{array}{r} 9 \\ + 3 \\ \hline \end{array}$ | $\begin{array}{r} 7 \\ + 2 \\ \hline \end{array}$ | $\begin{array}{r} 5 \\ + 5 \\ \hline \end{array}$ | $\begin{array}{r} 0 \\ + 19 \\ \hline \end{array}$ | $\begin{array}{r} 8 \\ + 2 \\ \hline \end{array}$ | $\begin{array}{r} 11 \\ + 3 \\ \hline \end{array}$ |
|---|---|---|---|--|---|--|

| | | | | | |
|---|---|---|---|---|--|
| $\begin{array}{r} 2 \\ + 8 \\ \hline \end{array}$ | $\begin{array}{r} 8 \\ + 3 \\ \hline \end{array}$ | $\begin{array}{r} 1 \\ + 9 \\ \hline \end{array}$ | $\begin{array}{r} 3 \\ + 7 \\ \hline \end{array}$ | $\begin{array}{r} 9 \\ + 2 \\ \hline \end{array}$ | $\begin{array}{r} 10 \\ + 2 \\ \hline \end{array}$ |
|---|---|---|---|---|--|



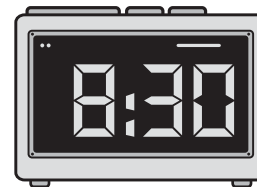
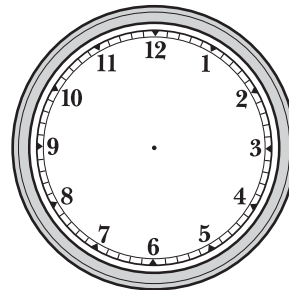
7 Read each of these clock faces and write the time on the digital clock.



(continued on next page)

NAME _____

DATE _____

Number Corner Checkup 1 page 4 of 4**8** Draw hour and minute hands on the clock faces to show the times below.**a****b****c****9** Choose the correct time for each event below. Fill in the bubble to show your choice.**a** TJ is in second grade. School starts for TJ at

- 8:15 a.m.
 8:15 p.m.

b The Smith family eats dinner at

- 6:00 a.m.
 6:00 p.m.